







5.2.21

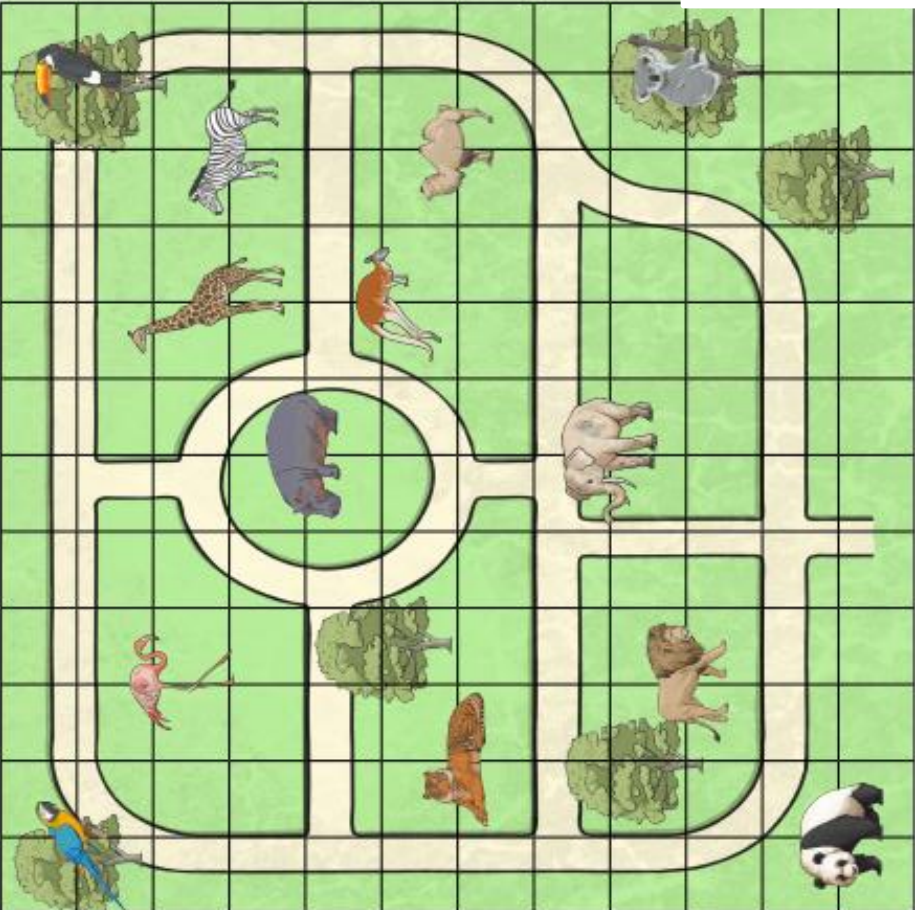
TBAT describe position using coordinates.

Hot



Which animal is at these coordinates on the zoo map?											
(11,11) =	_____	(2,6) =	_____								
(6,8) =	_____	(3,10) =	_____								
(11,3) =	_____	(1,1) =	_____								

Write the coordinates of these animals on the zoo map:											
	=	_____		=	_____						
	=	_____		=	_____						
	=	_____		=	_____						

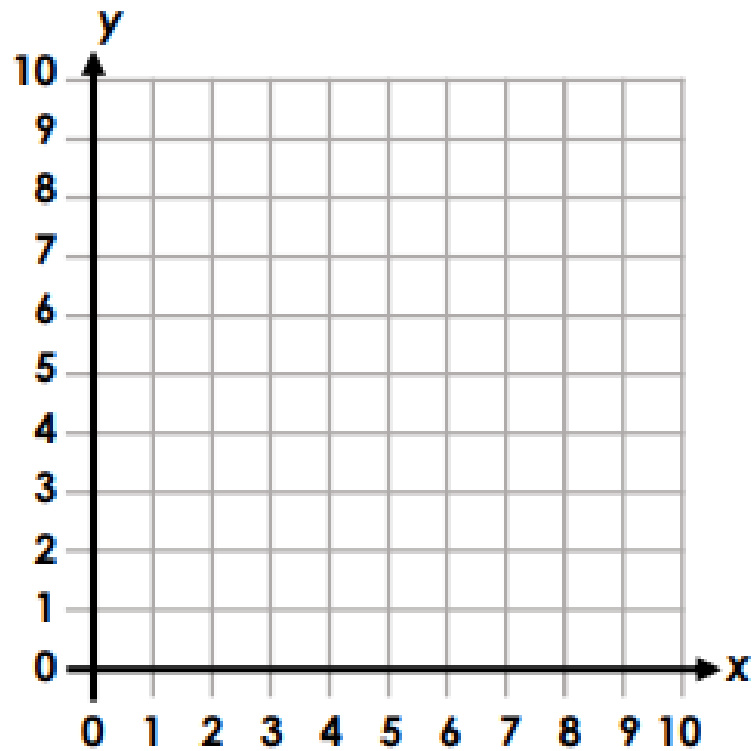


0 1 2 3 4 5 6 7 8 9 10 11

12 11 10 9 8 7 6 5 4 3 2 1 0

4a. The coordinates below will create a letter. Draw and join them on the grid to find out the letter.

(1, 1) (1, 6) (3, 6) (3, 4) (1, 4)

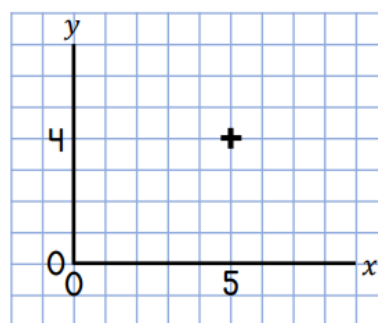


PS

True or False ?

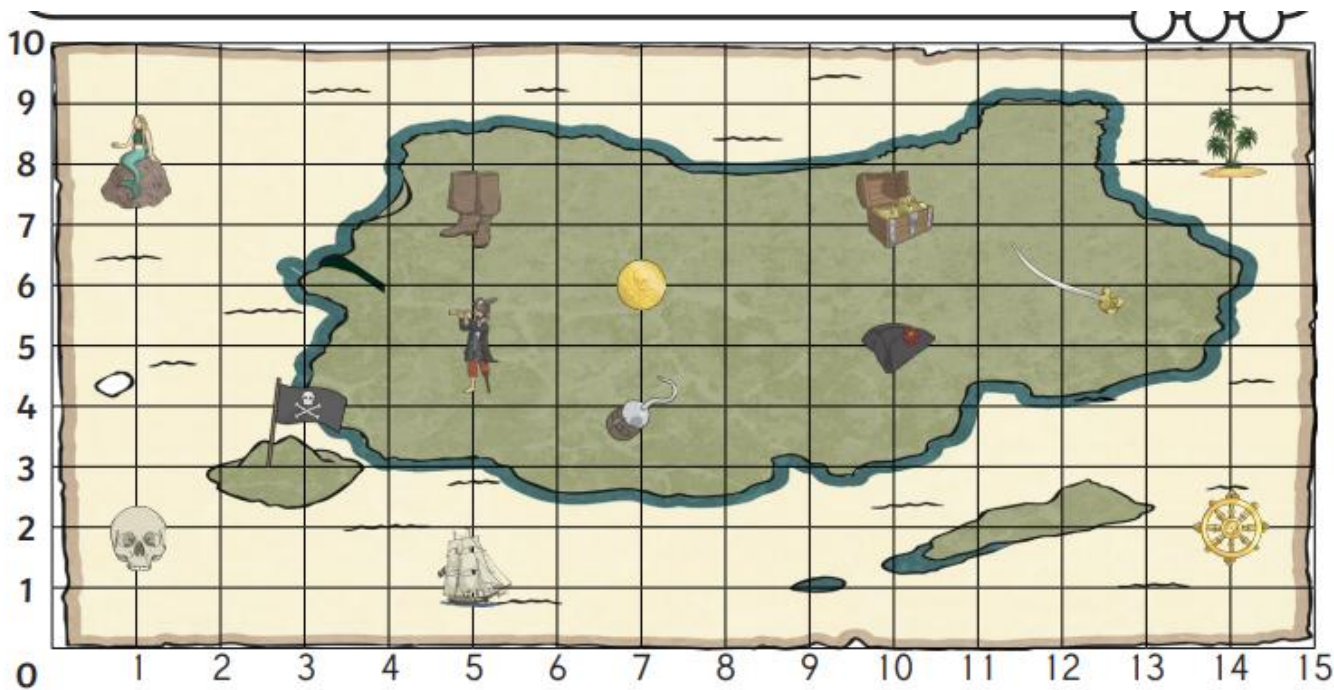
Position in the first quadrant

The coordinate shown is point (4, 5).








White
Rose
Maths

Spicy

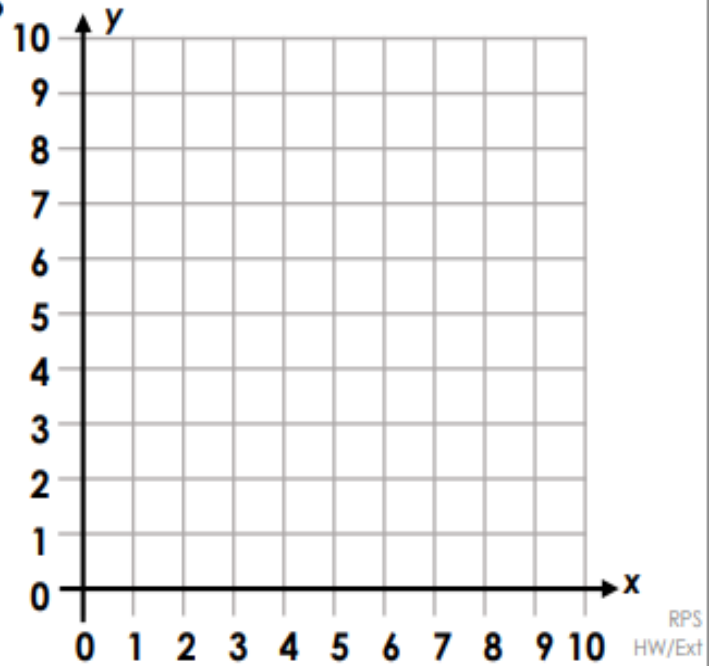


What is at these coordinates on the pirate map?
(5,5) = _____
(7,6) = _____
(12,6) = _____
(10,7) = _____
(1,8) = _____

Write the coordinate of these places on the pirate map:
 = (,)
 = (,)
 = (,)
 = (,)
 = (,)

Plot these coordinates on the grid using a cross.
(2,1)
(14,5)
(9,5)
(4,9)
(8,10)

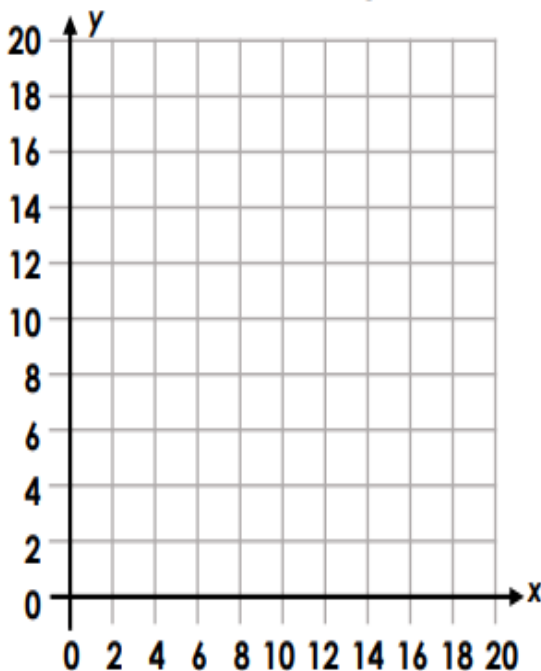
6. Lucy was plotting the points to make a pentagon, but someone spilled paint on her work. What could the missing coordinates be?



What could Lucy's coordinates be?

(,) (,) (,)
 (,) (,)

8. Plot the coordinates on the grid. Identify the shape created when they are joined.



(4, 18) (14, 18)
 (4, 8) (14, 8)
 (9, 3)

